

# Lesson 4.4

## Area and Expressions w/Parenthesis

Name: \_\_\_\_\_

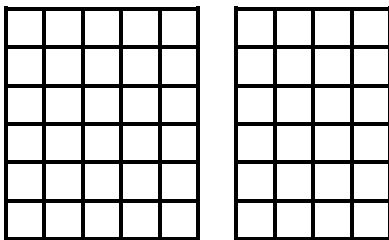
Date: \_\_\_\_\_

Students write expressions for the compound area problems and

Directions: Write an expression to find the combined area of the two shapes.

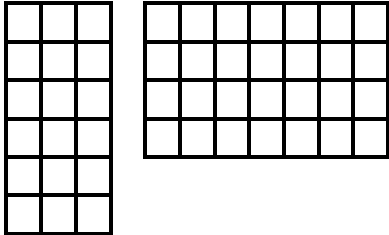
**Area = L x W**

1)



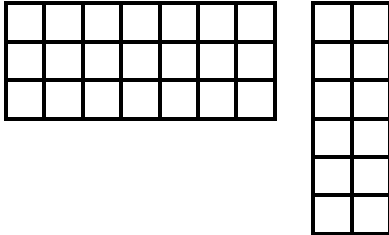
<b>Rectangle 1</b> L = W =  <b>Rectangle 2</b> L = W =	
--	--

2)



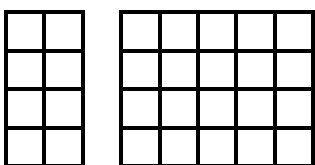
<b>Rectangle 1</b> L = W =  <b>Rectangle 2</b> L = W =	
--	--

3)



<b>Rectangle 1</b> L = W =  <b>Rectangle 2</b> L = W =	
--	--

4)



<b>Rectangle 1</b> L = W =  <b>Rectangle 2</b> L = W =	
--	--