

Lesson 3.1

Addition & Perimeter

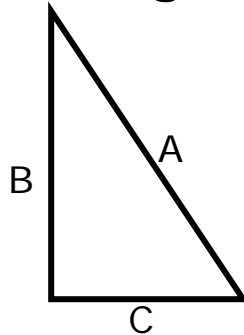
Name: _____

Date: _____

Students will practice simple addition by finding the perimeter of polygons.

Triangle

of Sides



Side A: _____

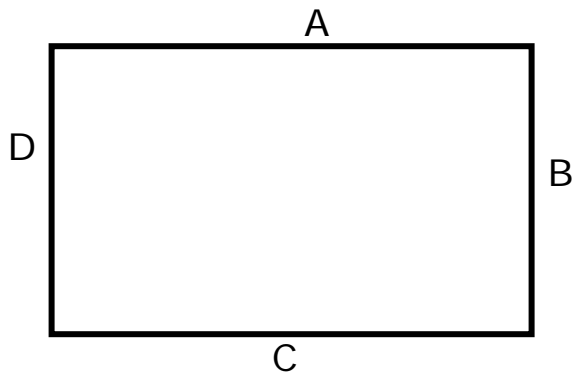
Side B: _____

Side C: _____

Perimeter: _____

Rectangle

of Sides



Side A: _____

Side B: _____

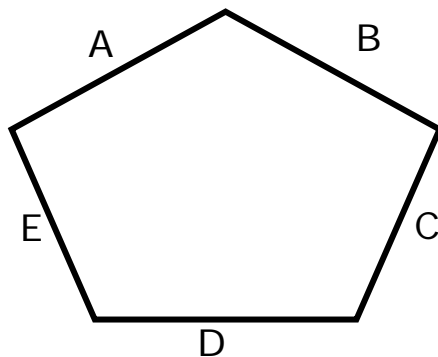
Side C: _____

Side D: _____

Perimeter: _____

Pentagon

of Sides



Side A: _____

Side B: _____

Side C: _____

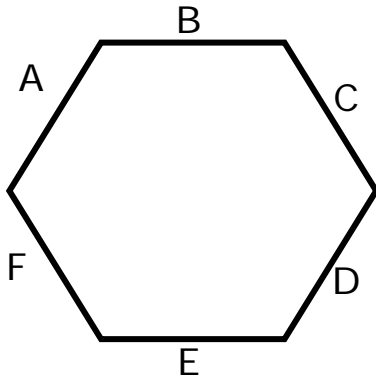
Side D: _____

Side E: _____

Perimeter: _____

Hexagon

of Sides:



Side A: _____

Side B: _____

Side C: _____

Side D: _____

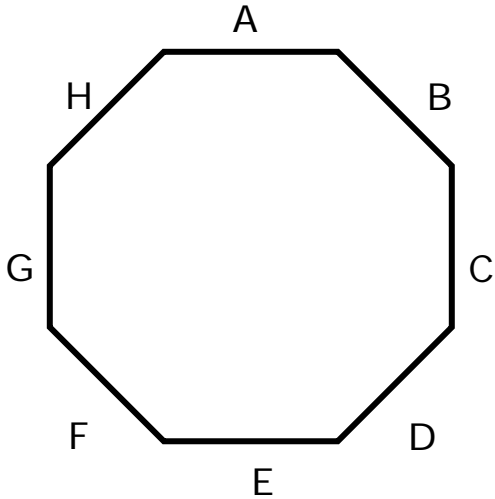
Side E: _____

Side F: _____

Perimeter: _____

Octagon

of Sides



Side A: _____

Side B: _____

Side C: _____

Side D: _____

Side E: _____

Side F: _____

Side G: _____

Side H: _____

Perimeter: _____